






### 3. SINIF BİLSEM ETKİNLİKLERİ - 2



Yan tarafta açılımı verilen küp aşağıdakilerden hangisi olamaz?



TIRNAK



PARMAK

Bu ilişkiye göre soru işaretli yere hangisi gelmelidir?


SAÇ



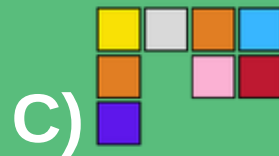

?

A) Kuaför B) Dudak

C) Kafa D) Şampuan



Yandaki şeklin, altındaki çizgiye göre simetrisi aşağıdakilerden hangisidir?



**MENTALUP**  
EĞİTİCİ ZEKA OYUNU